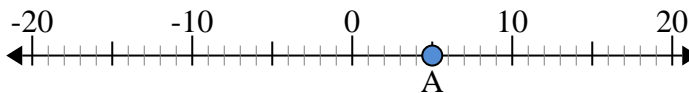




Use the numberlines to find the absolute value.

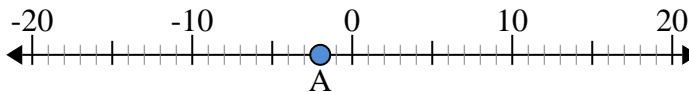
Answers

- 1) a. What is the value of 'A'?
- b. How far is 'A' from 0 (absolute value)?



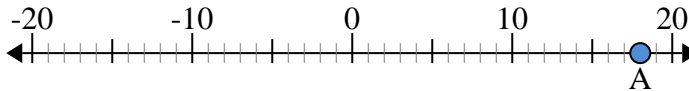
1. _____

- 2) a. What is the value of 'A'?
- b. How far is 'A' from 0 (absolute value)?



2. _____

- 3) a. What is the value of 'A'?
- b. How far is 'A' from 0 (absolute value)?



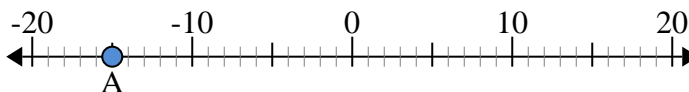
3. _____

- 4) a. What is the value of 'A'?
- b. How far is 'A' from 0 (absolute value)?



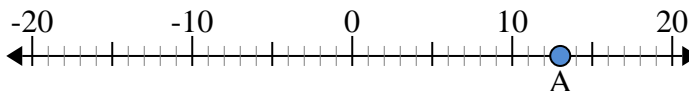
4. _____

- 5) a. What is the value of 'A'?
- b. How far is 'A' from 0 (absolute value)?



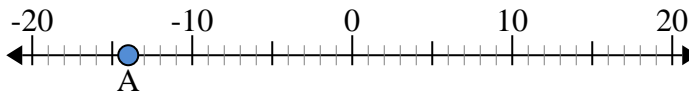
5. _____

- 6) a. What is the value of 'A'?
- b. How far is 'A' from 0 (absolute value)?



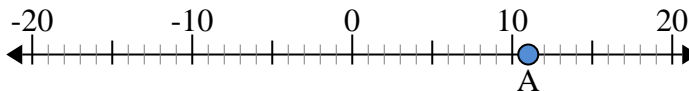
6. _____

- 7) a. What is the value of 'A'?
- b. How far is 'A' from 0 (absolute value)?



7. _____

- 8) a. What is the value of 'A'?
- b. How far is 'A' from 0 (absolute value)?



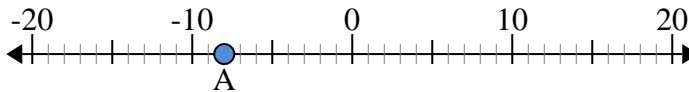
8. _____

- 9) a. What is the value of 'A'?
- b. How far is 'A' from 0 (absolute value)?



9. _____

- 10) a. What is the value of 'A'?
- b. How far is 'A' from 0 (absolute value)?

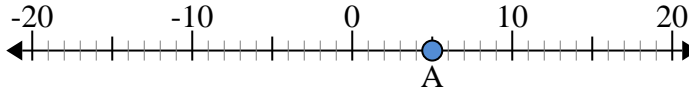


10. _____

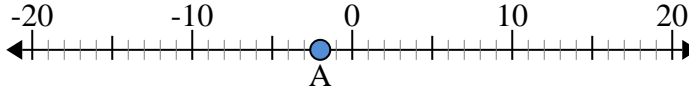


Use the numberlines to find the absolute value.

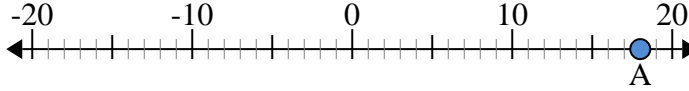
- 1) a. What is the value of 'A'?
b. How far is 'A' from 0 (absolute value)?



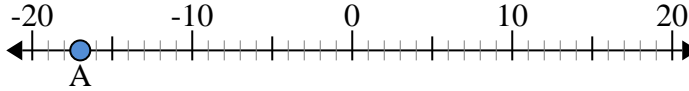
- 2) a. What is the value of 'A'?
b. How far is 'A' from 0 (absolute value)?



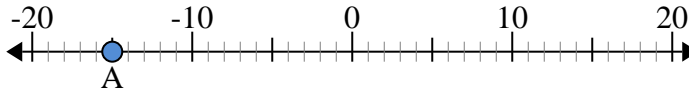
- 3) a. What is the value of 'A'?
b. How far is 'A' from 0 (absolute value)?



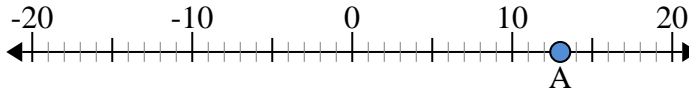
- 4) a. What is the value of 'A'?
b. How far is 'A' from 0 (absolute value)?



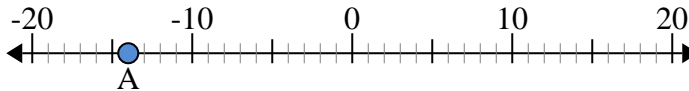
- 5) a. What is the value of 'A'?
b. How far is 'A' from 0 (absolute value)?



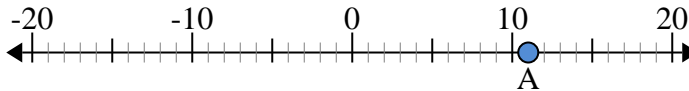
- 6) a. What is the value of 'A'?
b. How far is 'A' from 0 (absolute value)?



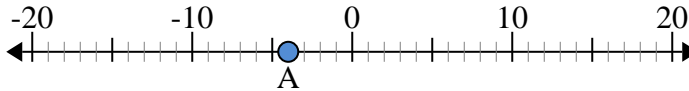
- 7) a. What is the value of 'A'?
b. How far is 'A' from 0 (absolute value)?



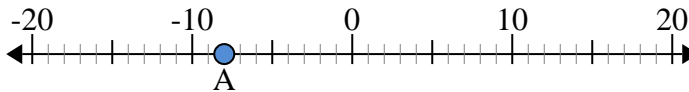
- 8) a. What is the value of 'A'?
b. How far is 'A' from 0 (absolute value)?



- 9) a. What is the value of 'A'?
b. How far is 'A' from 0 (absolute value)?



- 10) a. What is the value of 'A'?
b. How far is 'A' from 0 (absolute value)?



Answers

1.	<u>5</u>	<u>5</u>
2.	<u>-2</u>	<u>2</u>
3.	<u>18</u>	<u>18</u>
4.	<u>-17</u>	<u>17</u>
5.	<u>-15</u>	<u>15</u>
6.	<u>13</u>	<u>13</u>
7.	<u>-14</u>	<u>14</u>
8.	<u>11</u>	<u>11</u>
9.	<u>-4</u>	<u>4</u>
10.	<u>-8</u>	<u>8</u>